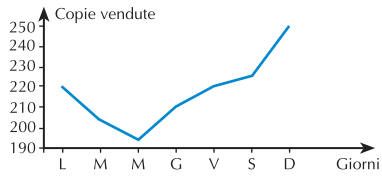
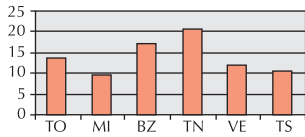


# Soluzioni verifica delle abilità

1



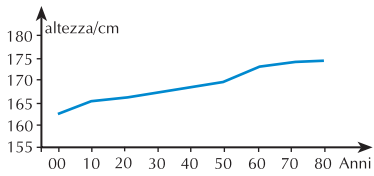
2



3

Ore	0	4	8	12	16	20	24
$t$ in $^{\circ}\text{C}$	37,2	37,5	37,2	38	38,3	37,6	37,5

4



5

